

TEST ID : 114  
MAX. MARKS : 720  
EXAM DURATION : 3 HOURS

Roll No.

Name :

Exam Date : .....

# M-STAR<sup>★</sup>

Momentum Scholarship Test for Admission & Rewards

8<sup>th</sup> Edition, 2023-24

Talent HUNT Exam



**Class XI Studying Students (NEET Aspirants)  
Physics, Chemistry, Botany & Zoology**

## INSTRUCTIONS FOR CANDIDATE

1. This booklet is your Question Paper. Do not open this booklet before being instructed to do so by the invigilator.
2. You may complete Your Name, Roll No. on the cover page.
3. Blank spaces and blank pages are provided in this booklet for your rough work. No Additional sheet will be provided for rough work.
4. Blank papers, clipboards, log tables, slide rules, calculators, cameras, cellular phones, pagers and electronic gadgets are NOT allowed inside the examination hall.
5. **Using a Blue/Black Pen, Darken the bubbles on the OMR sheet**
6. DO NOT TAMPER WITH/MUTILATE THE OMR OR THE BOOKLET
7. In the booklet, check that all the 200 questions and corresponding answer choices are legible.
8. Write your name, class and the Father's name in the boxes provided on the right part of the OMR. Do not write any of this information anywhere else. Darken the appropriate bubble under each digit of your Roll Number and Test ID Number.
9. The test booklet contains 200 multiple choice questions (four options with a single correct answer) from **Physics, Chemistry, Botany and Zoology** subject.  
(a) **Section A** shall consist of 35 Questions in each subject (**Question No. 1 to 35, 51 to 85, 101 to 135 and 151 to 185**). All questions are compulsory.  
(b) **Section B** shall consist of 15 Questions in each subject of (**Question No. 36 to 50, 86 to 100, 136 to 150 and 186 to 200**). In Section B, a candidate needs to attempt any 10 questions out of 15 in each subject.
10. Candidate are advised to read all 15 questions in each subject of section B before they start attempting the question paper. In the event of a candidate attempting more than 10 questions, the first 10 Question's answer by the candidate shall he evaluated.
11. Marking Scheme: **+4** for correct answer, **0** for unattempted and **-1** for wrong attempt .
12. On completion of the test, the candidate must hand over the **OMR** Sheet to the invigilator on duty in the Room/Hall.



**MOMENTUM**

छात्रसंघ चौक, गोरखपुर | बस्ती | देवरिया

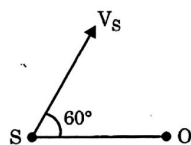




## PART - I : PHYSICS

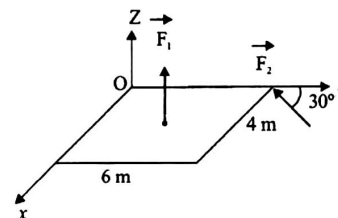
## SECTION - A

1. A wave is represented by the equation :  
 $y = a \sin(0.01x - 2t)$  where  $a$  and  $x$  are in  $cm$ . velocity of propagation of wave is  
 (1)  $10 \text{ cm/s}$  (2)  $50 \text{ cm/s}$   
 (3)  $100 \text{ cm/s}$  (4)  $200 \text{ cm/s}$
2. The stream of a river is flowing with a speed of  $2 \text{ km/h}$ . A swimmer can swim at a speed of  $4 \text{ km/h}$ . What should be the direction of the swimmer with respect to the flow of the river to cross the river straight?  
 (1)  $90^\circ$  (2)  $150^\circ$   
 (3)  $120^\circ$  (4)  $60^\circ$
3. A source of sound  $S$  emitting waves of frequency  $100 \text{ Hz}$  and an observer  $O$  are located at some distance from each other. The source is moving with a speed of  $19.4 \text{ ms}^{-1}$  at an angle of  $60^\circ$  with the source observer line as shown in the figure. The observer is at rest. The apparent frequency observed by the observer (velocity of sound in air  $330 \text{ ms}^{-1}$ ), is :



- (1)  $106 \text{ Hz}$  (2)  $97 \text{ Hz}$   
 (3)  $100 \text{ Hz}$  (4)  $103 \text{ Hz}$
4. A boy and a man carry a uniform rod of length  $L$ , horizontally in such a way that boy gets  $\frac{1}{4}$  th load. If the boy is at one end of the rod, the distance of the man from the other end is  
 (1)  $\frac{L}{3}$  (2)  $\frac{L}{4}$   
 (3)  $\frac{2L}{3}$  (4)  $\frac{3L}{4}$
5. The centripetal acceleration of a particle varies inversely with the square of the radius  $r$  of the circular path. The KE of this particle varies directly as  
 (1)  $r$  (2)  $r^2$   
 (3)  $r^{-2}$  (4)  $r^{-1}$

6. Two wires of the same material have lengths in the ratio  $1:2$  and their radii are in the ratio  $1:\sqrt{2}$ . If they are stretched by applying equal forces, the increase in their lengths will be in the ratio  
 (1)  $\sqrt{2}:2$  (2)  $2:\sqrt{2}$   
 (3)  $1:1$  (4)  $1:2$
7. A slab is subjected to two forces  $\vec{F}_1$  and  $\vec{F}_2$  of same magnitude  $F$  as shown in the figure. Force  $\vec{F}_2$  is in  $XY$ -plane while force  $\vec{F}_1$  acts along  $z$ -axis at the point  $(2\hat{i} + 3\hat{j})$ . The moment of these forces about point  $O$  will be:



- (1)  $(3\hat{i} - 2\hat{j} + 3\hat{k})F$  (2)  $(3\hat{i} - 2\hat{j} - 3\hat{k})F$   
 (3)  $(3\hat{i} + 2\hat{j} - 3\hat{k})F$  (4)  $(3\hat{i} + 2\hat{j} + 3\hat{k})F$
8. A needle made up of iron floats on the water surface due to  
 (1) surface tension of water is greater than the weight  
 (2) free surface energy of water surface  
 (3) surface energy of water surface  
 (4) viscous force of water
9. The number of particles crossing a unit area perpendicular to the  $x$ -axis in a unit time is given by  $n = -D \left( \frac{n_2 - n_1}{x_2 - x_1} \right)$ , where  $n_1$  and  $n_2$  are the number of particles per unit volume at  $x = x_1$  and  $x = x_2$ , respectively, and  $D$  is the diffusion constant. The dimensions of  $D$  are  
 (1)  $[M^0 L T^{-2}]$  (2)  $[M^0 L^2 T^{-4}]$   
 (3)  $[M^0 L^2 T^{-2}]$  (4)  $[M^0 L^2 T^{-1}]$

10. If 1 kg air ( $\gamma = 1.4$ ) is heated from  $0^\circ\text{C}$  to  $10^\circ\text{C}$  then increase in its internal energy will be :

(CV = 0.172 cal/gm  $^\circ\text{C}$ )

- (1) 1720 joule (2) 7224 joule  
(3) 172 calorie (4) 7224 calorie

11. The  $x$  and  $y$  coordinates of the particle at any time are  $x = 5t - 2t^2$  and  $y = 10t$  respectively, where  $x$  and  $y$  are in metres and  $t$  in seconds.

The acceleration of the particle at  $t = 2$  s is

- (1)  $5 \text{ ms}^{-2}$  (2)  $-4 \text{ ms}^{-2}$   
(3)  $-8 \text{ ms}^{-2}$  (4) 0

12. The length of the second pendulum is decreased by 0.3 cm when its shifted to Chennai From London. If the acceleration due to gravity at London is  $981 \text{ cm/s}^2$ , the acceleration due to gravity at Chennai is :

(assume  $\pi^2 = 10$ )

- (1)  $981 \text{ cm/s}^2$  (2)  $978 \text{ cm/s}^2$   
(3)  $984 \text{ cm/s}^2$  (4)  $975 \text{ cm/s}^2$

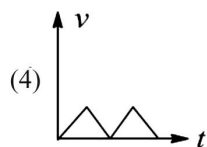
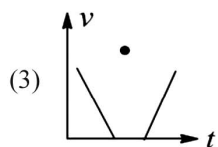
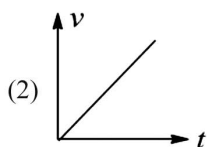
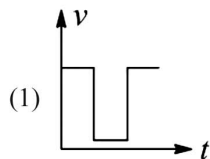
13. When two bodies collide elastically, the force of interaction between them is

- (1) Conservative  
(2) Non-conservative  
(3) Either conservative or non-conservative  
(4) Zero

14. At a given temperature, the pressure of an ideal gas of density  $\rho$  is proportional to

- (1)  $\frac{1}{\rho^2}$  (2)  $\frac{1}{\rho}$   
(3)  $\rho^2$  (4)  $\rho$

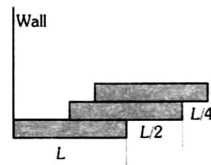
15. Which of the following velocity-time graphs is not possible practically?



16. 19 g of water at  $30^\circ\text{C}$  and 5 g of ice at  $-20^\circ\text{C}$  are mixed together in a calorimeter. What is the final temperature of the mixture ?

- (1)  $0^\circ\text{C}$  (2)  $-5^\circ\text{C}$   
(3)  $5^\circ\text{C}$  (4)  $10^\circ\text{C}$

17. Three bricks each of length  $L$  and mass  $M$  are arranged as shown from the wall. The distance of the centre of mass of the system from the wall is



- (1)  $L/4$  (2)  $L/2$   
(3)  $(3/2)L$  (4)  $(11/12)L$

18. The relative density of a material is found by weighing the body first in air and then in water. If the weight in air is  $(10.0 \pm 0.1)$  gf and weight in water is  $(5.0 \pm 0.1)$  gf, then the maximum permissible percentage error in relative density is

- (1) 1 (2) 2  
(3) 3 (4) 5

19. If a system undergoes contraction of volume then the work done by the system will be

- (1) Zero (2) Negligible  
(3) Negative (4) Positive

20. An ideal gas is subjected to cyclic process involving four thermodynamic states, the amounts of heat ( $Q$ ) and work ( $W$ ) involved in each of these states

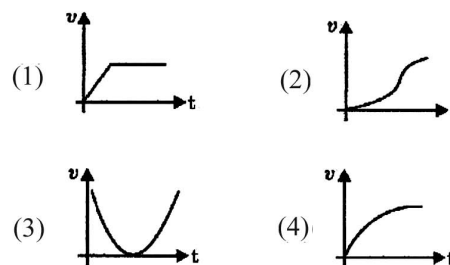
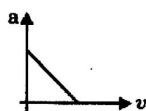
$$Q_1 = 6000 \text{ J}; Q_2 = -5500 \text{ J}; Q_3 = -3000 \text{ J}; Q_4 = 3500 \text{ J}$$

$$W_1 = 2500 \text{ J}; W_2 = -1000 \text{ J}; W_3 = -1200 \text{ J}; W_4 = x \text{ J}$$

The ratio of the net work done by the gas to the total heat absorbed by the gas is  $\eta$ . The values of  $x$  and  $\eta$  respectively are

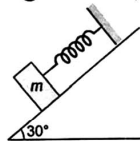
- (1) 500; 7.5% (2) 700; 10.5%  
(3) 1000; 21% (4) 1500; 15%

21. When a spring is stretched by a distance  $x$ , it exerts a force, given by  $F = (-5x - 16x^3)$ N. The work done, when the spring is stretched from 0.1 m to 0.2 m is
- (1)  $8.7 \times 10^{-2}$ J                      (2)  $12.2 \times 10^{-2}$ J  
 (3)  $8.7 \times 10^{-1}$ J                      (4)  $12.2 \times 10^{-1}$ J
22. A rod of length 20 cm is made of metal. It expands by 0.075 cm when its temperature is raised from 0°C to 100°C. Another rod of a different metal B having the same length expands by 0.045 cm for the same change in temperature. A third rod of the same length is composed of two parts, one of metal A and the other of metal B. This rod expands by 0.060 cm for the same change in temperature. The portion made of metal A has the length
- (1) 20 cm                                  (2) 10 cm  
 (3) 15 cm                                  (4) 18 cm
23. The motion of a simple pendulum executing S.H.M. is represented by following equation.  
 $Y = A \sin(\pi t + \phi)$  where time is measured in second.  
 The length of pendulum is :
- (1) 97.23 cm                              (2) 25.3 cm  
 (3) 99.4 cm                                (4) 406.1 cm
24. Water falls from a height 500 m. The rise in temperature of water at bottom if whole of energy remains in water, will be (specific heat of water is  $c=4.2 \text{ kJ kg}^{-1}$ )
- (1) 0.23°C                                (2) 1.16°C  
 (3) 0.96°C                                (4) 1.02°C
25. The moment of inertia of a body does not depend upon
- (1) The angular velocity of the body  
 (2) The mass of the body  
 (3) The distribution of mass in the body  
 (4) The axis of rotation of the body
26. Acceleration versus velocity graph of a particle moving in a straight line starting from rest is as shown in figure. The corresponding velocity-time graph would be :



27. In which case the thermal conductivity increases from left to right
- (1) Al, Cu, Ag                              (2) Ag, Cu, Al  
 (3) Cu, Ag, Al                              (4) Al, Ag, Cu
28. A train is moving with a constant speed along a circular track. The engine of the train emits a sound of frequency  $f$ . The frequency heard by the guard at rear end of the train is :
- (1) Less than  $f$   
 (2) Equal to  $f$   
 (3) Greater than  $f$   
 (4) May be greater than, less than or equal to  $f$  depending on the factors like speed of train, length of train and radius of circular track.
29. Two factories are sounding their sirens at 800 Hz. A man goes from one factory to the other at a speed of 2 m/s. The velocity of sound is 320 m/s. The number of beats heard by the person in 1 s will be
- (1) 2    (2) 4  
 (3) 8    (4) 10
30. The graph between the applied force & the change in length of a wire within elastic limit is
- (1) a straight line with positive slope  
 (2) a straight line, with negative slope  
 (3) a straight line with zero slope  
 (4) none of these
31. For three particles A, B and C moving along x-axis,  $x-t$  graph is as shown below: Mark out the correct relationships between their average velocities between the points P and Q
- 
- (1)  $v_{av,A} > v_{av,B} = v_{av,C}$   
 (2)  $v_{av,A} = v_{av,B} = v_{av,C}$   
 (3)  $v_{av,A} > v_{av,B} > v_{av,C}$   
 (4)  $v_{av,A} < v_{av,B} < v_{av,C}$

32. A body of mass 5 kg is suspended by a spring balance on an inclined plane as shown in figure. The spring balance, measure



- (1) 50 N (2) 25 N  
(3) 500 N (4) 10 N
33. Sound waves travel at  $350\text{ m/s}$  through a warm air and at  $3500\text{ m/s}$  through brass. The wavelength of a  $700\text{ Hz}$  acoustic wave as it enters brass from warm air  
(1) Decreases by a factor 20  
(2) Decreases by a factor 10  
(3) Increases by a factor 20  
(4) Increases by a factor 10
34. If air resistance is not considered in a projectile motion, the horizontal motion takes place with  
(1) Constant velocity  
(2) Constant acceleration  
(3) Constant retardation  
(4) Variable velocity
35. A litre of alcohol weighs  
(1) Less in winter than in summer  
(2) Less in summer than in winter  
(3) Same both in summer and winter  
(4) None of the above

### SECTION - B

(Attempt any 10(Ten) questions out of 15 (Fifteen))

36. From the top of tower a body  $A$  is projected vertically up, another body  $B$  is horizontally thrown and a third body  $C$  is thrown vertically down with same velocity. Then  
(1)  $B$  strikes the ground with more velocity  
(2)  $C$  strikes the ground with less velocity  
(3)  $A, B, C$  strike the ground with same velocity  
(4)  $A$  and  $C$  strike the ground with more velocity than  $B$

37. Which law of thermodynamics leads to the concept of temperature?  
(1) Zeroth law (2) First law  
(3) Second law (4) Both zeroth and first laws

38. A steel scale measures the length of copper wire as  $80.0\text{ cm}$ , when both are at  $20^\circ\text{C}$  (the calibration temperature for scale). What would be the scale read for the length of the wire when both are at  $40^\circ\text{C}$ ? (Given  $\alpha_{\text{steel}} = 11 \times 10^{-6}\text{ per}^\circ\text{C}$  and  $\alpha_{\text{copper}} = 17 \times 10^{-6}\text{ per}^\circ\text{C}$ )  
(1)  $80.0096\text{ cm}$  (2)  $80.0272\text{ cm}$   
(3)  $1\text{ cm}$  (4)  $25.2\text{ cm}$

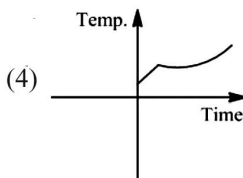
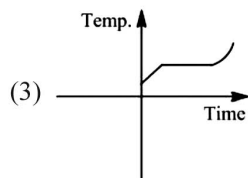
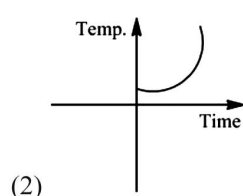
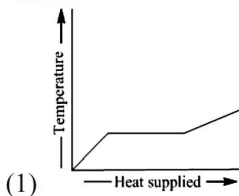
39. Given below are two statements : one is labelled as Assertion A and the other is labelled as Reason R.  
**Assertion A:** Body 'P' having mass  $M$  moving with speed 'u' has head-on collision elastically with another body 'Q' having mass 'm' initially at rest. If  $m \ll M$ , body 'Q' will have a maximum speed equal to '2u' after collision.

**Reason R :** During elastic collision, the momentum and kinetic energy are both conserved. In the light of the above statements, choose the most appropriate answer from the options given below:

- (1) Both A and R are correct and R is the correct explanation of A  
(2) A is not correct but R is correct  
(3) A is correct but R is not correct  
(4) Both A and R are correct but R is NOT the correct explanation of A
40. In an elastic collision of two particles the following is conserved  
(1) Momentum of each particle  
(2) Speed of each particle  
(3) Kinetic energy of each particle  
(4) Total kinetic energy of both the particles

41. A refrigerator is thermally equivalent to a box of cork board  $90\text{ mm}$  thick and  $6\text{ m}^2$  in inner surface area, the thermal conductivity of cork being  $0.05\text{ W/mK}$ . The motor of the refrigerator runs 15% of the time while the door is closed. The inside wall of the door, when it is closed, is kept, on an average,  $22^\circ\text{C}$  below the temperature of the outside wall. The rate at which heat is taken from the interior wall while the motor is running is  
(1)  $400\text{ W}$  (2)  $500\text{ W}$   
(3)  $300\text{ W}$  (4)  $250\text{ W}$

42. A body is coming with a velocity of  $72 \text{ kmh}^{-1}$  on a rough horizontal surface of coefficient of friction 0.5. If the acceleration due to gravity is  $10 \text{ ms}^{-2}$ , find the minimum distance it can be stopped
- (1) 400 m (2) 40 m  
(3) 0.40 m (4) 4 m
43. The value of  $C_V$  for one mole of neon gas is
- (1)  $\frac{1}{2}R$  (2)  $\frac{3}{2}R$   
(3)  $\frac{5}{2}R$  (4)  $\frac{7}{2}R$
44. Water is used to cool radiators of engines, because :
- (1) of its lower density (2) it is easily available  
(3) it is cheap (4) it has high specific heat
45. The moment of inertia of a body rotating about a given axis is  $12.0 \text{ kgm}^2$  in the SI system. What is the value of the moment of inertia in a system of units in which the unit of length is 5 cm and the unit of mass is 10 g?
- (1)  $2.4 \times 10^3$  (2)  $6.0 \times 10^3$   
(3)  $5.4 \times 10^5$  (4)  $4.8 \times 10^5$
46. Liquid oxygen at 50 K is heated to 300 K at constant pressure of 1 atm. The rate of heating is constant. Which of the following graphs represents the variations of temperature with time?



47. If temperature of an object is  $140^\circ F$ , then its temperature in centigrade is

(1)  $105^\circ C$  (2)  $32^\circ C$   
(3)  $140^\circ C$  (4)  $60^\circ C$

48. A force applied by an engine of a train of mass  $2.05 \times 10^6 \text{ kg}$  changes its velocity from 5 m/s to 25 m/s in 5 minutes. The power of the engine is

(1)  $1.025 \text{ MW}$  (2)  $2.05 \text{ MW}$   
(3)  $5 \text{ MW}$  (4)  $6 \text{ MW}$

49. Which of the following factors does not affect the angle of contact?

(1) Nature of vessel (2) Temperature  
(3) Nature of liquid (4) Surface area

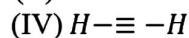
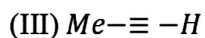
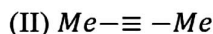
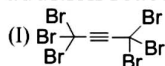
50. In an adiabatic process where pressure is increased by  $\frac{2}{3}\%$  if  $\frac{C_p}{C_v} = \frac{3}{2}$ , then the volume decreases by about

(1)  $\frac{4}{9}\%$  (2)  $\frac{2}{3}\%$   
(3)  $4\%$  (4)  $\frac{9}{4}\%$

## PART - II : CHEMISTRY

## SECTION - A

51. Give the reactivity in the decreasing order of the following alkynes towards nucleophilic addition reaction with  $MeO^{\ominus}/MeOH$



- (1) (I)>(II)>(III)>(IV)      (2) (I)>(IV)>(III)>(II)  
 (3) (IV)>(III)>(II)>(I)      (4) (II)>(III)>(IV)>(I)

52. Calculate the energy in joule corresponding to light of wavelength 45 nm :

(Planck's constant  $h = 6.63 \times 10^{-34}$  Js; speed of light  $c = 3 \times 10^8$  ms $^{-1}$ )

- (1)  $6.67 \times 10^{15}$                       (2)  $6.67 \times 10^{11}$   
 (3)  $4.42 \times 10^{-15}$                     (4)  $4.42 \times 10^{-18}$

53.  $H_2SO_4$  is added while preparing a standard solution of Mohr's salt to prevent:

- (1) Hydration  
 (2) Reduction  
 (3) Hydrolysis  
 (4) Complex formation

54. A solution of KOH in water is called:

- (1) Potash lye                      (2) Soda lye  
 (3) Salt cake                        (4) None of these

55. In the change of  $NO^+$  to  $NO$  the electron is added to

- (1)  $\sigma$ -orbital                      (2)  $\pi$ -orbital  
 (3)  $\sigma^*$ -orbital                    (4)  $\pi^*$ -orbital

56. Which of the following has not a lone pair over the central atom

- (1)  $NH_3$                               (2)  $PH_3$   
 (3)  $BF_3$                               (4)  $PCl_3$

57. Which of the following statement is false

- (1)  $H_2$  molecule has one sigma bond  
 (2)  $HCl$  molecule has one sigma bond  
 (3) Water molecule has two sigma bonds and two lone pairs  
 (4) Acetylene molecule has three pi bonds and three sigma bonds

58. Which one of the elements has the maximum electron affinity

- (1) F                                      (2) Cl  
 (3) Br                                    (4) I

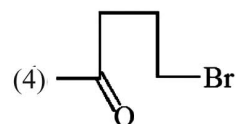
59. A compound X on heating gives a colourless gas. This residue is dissolved in water to obtain Y. Excess  $CO_2$  is bubbled through aqueous solution of Y when Z is formed. Z on gentle heating gives back X. The X is

- (1)  $CaCO_3$                               (2)  $Ca(HCO_3)_2$   
 (3)  $Na_2CO_3$                             (4)  $NaHCO_3$

60. The percentage of oxygen in NaOH is:

- (1) 40                                      (2) 16  
 (3) 8                                        (4) 1

61. Which of the following compound have 4 carbon atom in the parent chain ?



62. The equilibrium constant for the reaction  $N_2 + 3H_2 \rightleftharpoons 2NH_3$  is K, then the equilibrium constant for the equilibrium  $2NH_3 \rightleftharpoons N_2 + 3H_2$  is

- (1)  $\sqrt{K}$                                       (2)  $\sqrt{\frac{1}{K}}$   
 (3)  $\frac{1}{K}$                                         (4)  $\frac{1}{K^2}$

63. Which of the following shows nitrogen with its increasing order of oxidation number?

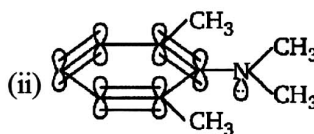
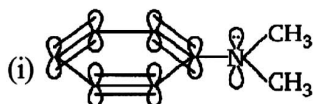
- (1)  $NO < N_2O < NO_2 < NO_3^- < NH_4^+$   
 (2)  $NH_4^+ < N_2O < NO < NO_2 < NO_3^-$   
 (3)  $NH_4^+ < N_2O < NO_2 < NO_3^- < NO$   
 (4)  $NH_4^+ < NO < N_2O < NO_2 < NO_3^-$



64. The structure of  $ICl_2^-$  is:
- (1) Trigonal
  - (2) Octahedral
  - (3) Square planar
  - (4) Distorted trigonal bipyramid
65. A metal M readily forms its sulphate  $MSO_4$  which is water-soluble. It forms its oxide MO which becomes inert on heating. It forms an insoluble hydroxide  $M(OH)_2$  which is soluble in NaOH solution. Then M is:
- (1) Mg
  - (2) Ba
  - (3) Ca
  - (4) Be

66. The gas used in the manufacture of ice-cream is:
- (1)  $CO_2$
  - (2)  $N_2O$
  - (3) NO
  - (4)  $N_2O_3$

67. Compare basic strength of the following :

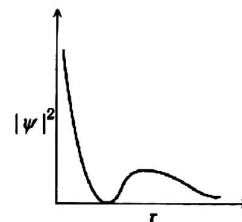


- (1)  $i > ii$
- (2)  $i = ii$
- (3)  $ii > i$
- (4)  $i \gg ii$

68. The brown haze of photochemical smog is largely attributable to
- (1) NO
  - (2)  $NO_2$
  - (3)  $CH_3COONO_2$
  - (4)  $CH_2 = CHCH = O$

69. Given enthalpy of formation of  $CO_2(g)$  and  $CaO(s)$  are  $-94.0 \text{ kJ}$  and  $-152 \text{ kJ}$  respectively and the enthalpy of the reaction,  $CaCO_3(s) \rightarrow CaO(s) + CO_2(g)$  is  $42 \text{ kJ}$ . The enthalpy of formation of  $CaCO_3(s)$  is :
- (1)  $-42 \text{ kJ}$
  - (2)  $-202 \text{ kJ}$
  - (3)  $+202 \text{ kJ}$
  - (4)  $-288 \text{ kJ}$

70. The graph between  $|\psi|^2$  and r (radial distance) is shown below. This represents



- (1) 3s orbital
- (2) 1s orbital
- (3) 2p orbital
- (4) 2s orbital

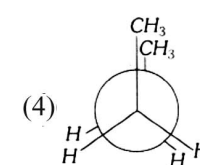
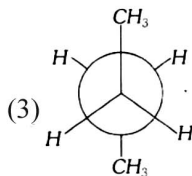
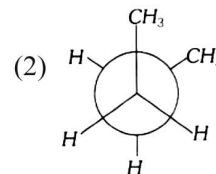
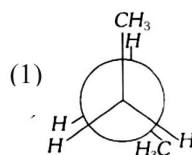
71. For the reaction,
- $$H_2(g) + Cl_2(g) \rightarrow 2HCl(g) + x_1 \text{ kJ} \dots \dots (i)$$
- $$2HCl(g) \rightarrow H_2(g) + Cl_2(g) - x_2 \text{ kJ} \dots \dots (ii)$$

Which of the following statement is correct?

- (1)  $x_1$  and  $x_2$  are numerically equal
- (2)  $x_1$  and  $x_2$  are numerically different
- (3)  $x_1 - x_2 > 0$
- (4)  $x_1 - x_2 < 0$

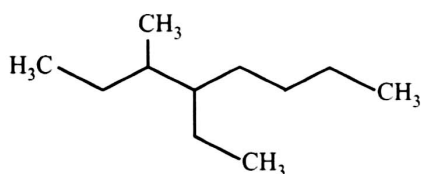
72. The solubility product of  $BaSO_4$  at  $25^\circ C$  is  $1.0 \times 10^{-9}$ . What would be the concentration of  $H_2SO_4$  necessary to precipitate  $BaSO_4$  from a solution of  $0.01 \text{ M } Ba^{2+}$  ions
- (1)  $10^{-9}$
  - (2)  $10^{-8}$
  - (3)  $10^{-7}$
  - (4)  $10^{-6}$

73. In the following the most stable conformation of n-butane is



74. Which of the following series of transitions in the spectrum of hydrogen atom falls in visible region
- (1) Lyman series
  - (2) Balmer series
  - (3) Paschen series
  - (4) Brackett series

75. Name of the compound given below is



- (1) 5-ethyl-6-methyloctane  
 (2) 4-ethyl-3-methyloctane  
 (3) 3-methyl-4-ethyloctane  
 (4) 2,3-diethylheptane
76. The number of molecule at NTP in 1 ml of an ideal gas will be  
 (1)  $6 \times 10^{23}$  (2)  $2.69 \times 10^{19}$   
 (3)  $2.69 \times 10^{23}$  (4) None of these
77. Ammonia on heating with carbon dioxide under pressure gives:  
 (1)  $NH_4HCO_3$  (2)  $(NH_4)_2CO_3$   
 (3)  $NH_2COONH_4$  (4)  $(NH_4)_2CO$
78. Which one of the following has minimum boiling point ?  
 (1) 1-Butene (2) 1-Butyne  
 (3) n-Butane (4) Isobutane
79. Least malleable and ductile metal is:  
 (1) Au (2) Ag  
 (3) Ni (4) Bi
80. The value of gas constant  $R$  in SI unit is:  
 (1)  $83 \text{ erg K}^{-1} \text{ mol}^{-1}$   
 (2)  $0.082 \text{ litre atm}$   
 (3)  $8.3 \text{ J mol}^{-1} \text{ K}^{-1}$   
 (4)  $0.987 \text{ cal mol}^{-1} \text{ K}^{-1}$
81.  $NH_3$  can't be obtained by  
 (1) Heating of  $NH_4NO_3$  or  $NH_4NO_2$   
 (2) Heating of  $NH_4Cl$  or  $(NH_4)_2CO_3$   
 (3) Heating of  $NH_4NO_3$  with NaOH  
 (4) Reaction of AlN or  $Mg_3N_2$  or  $CaCN_2$  with  $H_2O$
82. When potassium permanganate is titrated against ferrous ammonium sulphate in acidic medium, the equivalent weight of potassium permanganate is:  
 (1)  $\frac{\text{molecular weight}}{3}$  (2)  $\frac{\text{molecular weight}}{5}$   
 (3)  $\frac{\text{molecular weight}}{2}$  (4)  $\frac{\text{molecular weight}}{10}$

83. Which of the following is most volatile?  
 (1) HF (2) HCl  
 (3) HBr (4) HI
84. The number of lone pairs of electron on Xe in  $XeOF_4$  is:  
 (1) 1 (2) 2  
 (3) 3 (4) 4
85. For the reaction  $N_2O_4(g) \rightleftharpoons 2NO_2(g)$ , the degree of dissociation at equilibrium is 0.2 at 1 atm pressure. The equilibrium constant  $K_p$  will be  
 (1)  $1/2$  (2)  $1/4$   
 (3)  $1/6$  (4)  $1/8$

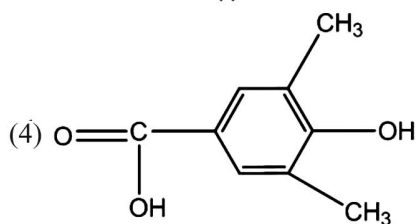
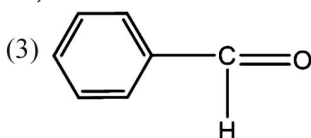
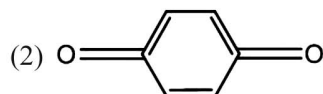
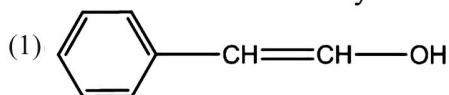
### SECTION - B

(Attempt any 10(Ten) questions out of 15 (Fifteen))

86. The number of wave made by an electron moving in an orbit having maximum magnetic quantum number +3 is :  
 (1) 4 (2) 3  
 (3) 5 (4) 6
87. Pick out the molecule which has zero dipole moment  
 (1)  $NH_3$  (2)  $H_2O$   
 (3)  $BCl_3$  (4)  $SO_2$
88. At ordinary temperature and pressure, among halogens, chlorine is a gas, bromine is a liquid and iodine is a solid. This is because:  
 (1) The specific heats are in the order  $Cl_2 > Br_2 > I_2$   
 (2) Intermolecular forces among molecules of chlorine are the weakest and those of iodine the strongest  
 (3) The order of density is  $I_2 > Br_2 > Cl_2$   
 (4) The order of stability is  $I_2 > Br_2 > Cl_2$
89. One mole of nitrogen is mixed with 3 mole of hydrogen in a closed 3 litre vessel. 20% of nitrogen is converted into  $NH_3$ . Then  $K_c$  for the  $\frac{1}{2} N_2 + \frac{3}{2} H_2 \rightleftharpoons NH_3$  is:  
 (1)  $0.36 \text{ litre mol}^{-1}$  (2)  $0.46 \text{ litre mol}^{-1}$   
 (3)  $0.5 \text{ litre mol}^{-1}$  (4)  $0.2 \text{ litre mol}^{-1}$

90.  $\text{Be}(\text{OH})_2$  is insoluble in water, while  $\text{Ba}(\text{OH})_2$  is highly soluble due to
- (1) Lattice energy difference
  - (2) Common ion effect
  - (3) Bond order
  - (4) Hard acid

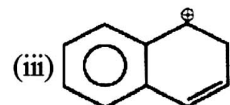
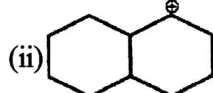
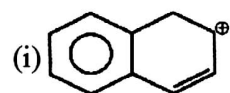
91. Tautomerism is exhibited by



92. The correct order of increasing bond angles in the following triatomic species is:

- (1)  $\text{NO}_2^- < \text{NO}_2 < \text{NO}_2^+$
- (2)  $\text{NO}_2^+ < \text{NO}_2 < \text{NO}_2^-$
- (3)  $\text{NO}_2^- < \text{NO}_2 < \text{NO}_2$
- (4)  $\text{NO}_2^- < \text{NO}_2^+ < \text{NO}_2$

93. Compare relative stability of following carbocation :



- (1)  $\text{i} > \text{ii} > \text{iii}$
- (2)  $\text{iii} > \text{i} > \text{ii}$
- (3)  $\text{i} > \text{iii} > \text{ii}$
- (4)  $\text{iii} > \text{ii} > \text{i}$

94. Which one has pH 12

- (1) 0.01 M KOH
- (2) 1 N KOH ml
- (3) 1 N NaOH ml
- (4) 1 N  $\text{Ca}(\text{OH})_2$  ml

95. Ammonium compound not used as a fertilizer is:

- (1)  $(\text{NH}_4)_2\text{SO}_4$
- (2)  $(\text{NH}_4)_2\text{CO}_3$
- (3)  $\text{NH}_4\text{NO}_3$
- (4) CAN(calcium ammonium nitrate)

96. The isomers which can be converted into another forms by rotation of the molecules around single bond are

- (1) Geometrical isomers
- (2) Conformers
- (3) Enantiomers
- (4) Diastereomers

97. A certain orbital has no angular nodes and two radial nodes. The orbital is

- (1) 2s
- (2) 3s
- (3) 3p
- (4) 2p

98. For the Balmer series in the spectrum of H atom,

$$\bar{\nu} = R_H \left\{ \frac{1}{n_1^2} - \frac{1}{n_2^2} \right\}, \text{ the correct statements among (I)}$$

to (IV) are:

- (I) As wavelength decreases, the lines in the series converge
- (II) The integer  $n_1$  is equal to 2
- (III) The lines of longest wavelength corresponds to  $n_2 = 3$
- (IV) The ionization energy of hydrogen can be calculated from wave number of these lines

- (1) (I), (III), (IV)
- (2) (I), (II), (III)
- (3) (I), (II), (IV)
- (4) (II), (III), (IV)

99. The decreasing leaving group order of the following compounds is:

i.  $\text{NH}_3$  ii.  $\text{PH}_3$  iii.  $\text{AsH}_3$  iv.  $\text{SbH}_3$

- (1) (i) > (ii) > (iii) > (iv)
- (2) (iv) > (iii) > (ii) > (i)
- (3) (ii) > (i) > (iii) > (iv)
- (4) (ii) > (i) > (iv) > (iii)

100. The number of paired electron in oxygen molecule are

- (1) 14
- (2) 8
- (3) 16
- (4) 12

## PART - III : BOTANY

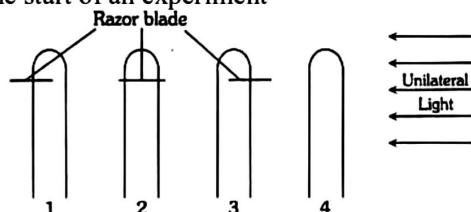
## SECTION - A

101. What is common for plasmids and mesosomes ?  
 (1) Both of these are made of nucleotides  
 (2) Both of these are concerned with molecular respiration  
 (3) Both of these are found in prokaryotes  
 (4) Both of these are found in eukaryotes
102. Ringing/girdling experiments demonstrate  
 (1) phloem is responsible for translocation of food  
 (2) xylem is responsible for ascent of sap  
 (3) transpiration pull  
 (4) both (1) and (2).
103. One of the synthetic auxin is  
**Or**  
 Flowering in pineapple is promoted by  
 (1) NAA (2) IAA  
 (3) GA (4) IBA
104. The gynoecium consists of many free pistils in flowers of  
 (1) Aloe (2) tomato  
 (3) Papaver (4) Michelia.
105. The hormone responsible for phototropism is  
 (1) Auxin (2)  $C_2H_4$   
 (3) ABA (4) GA
106. Crossing over that results in genetic recombination in higher organisms occurs between  
 (1) Sister chromatids of bivalent  
 (2) Non-sister chromatids of a bivalent  
 (3) Two daughter nuclei  
 (4) Two different bivalent
107. In plant cells, the vacuoles can occupy upto \_\_\_\_% of the volume of the cell.  
 (1) 30 (2) 20  
 (3) 10 (4) 90
108. Intercalary meristem results in  
 (1) Secondary growth (2) Primary growth  
 (3) Apical growth (4) None of these
109. Hydrogen is obtained by the plant mostly through  
 (1) Salts (2) Water  
 (3) Air (4) Both (2) and (3)
110. Bulliform cells :  
 (1) Are found in grasses  
 (2) Has no role in rolling of leaves  
 (3) Are absent in monocots  
 (4) Are present in dicot leaves
111. NADPH is generated through  
 (1) photosystem I (2) photosystem II  
 (3) anaerobic respiration (4) glycolysis
112. The nature of cells occurring in medulla is  
 (1) parenchymatous (2) sclerenchymatous  
 (3) collenchymatous (4) suberized
113. During mitosis ER and nucleolus begin to disappear at  
 (1) Late prophase (2) Early metaphase  
 (3) Late metaphase (4) Early prophase
114. Select the correct statement for nucleolus :  
 (1) It is a site for mRNA synthesis  
 (2) Large and more numerous nucleoli are present in cells actively carrying out protein synthesis  
 (3) Nucleolus contain nucleoplasm  
 (4) Nucleolus is a single membrane bound structure
115. Intercalary meristem is a derivative of  
 (1) Lateral meristem (2) Promeristem  
 (3) Primary meristem (4) Secondary meristem
116. From which part and type of a plant the following is a description of many vascular bundles, polyarch, closed, radial :  
 (1) dicot stem T.S.  
 (2) monocot root T.S.  
 (3) dicot root T.S.  
 (4) monocot stem T.S.
117. Bicarpellary syncarpous gynoecium, parietal placentation, tetradynamous stamens and siliqua fruit are characteristic features of family  
 (1) Cucurbitaceae (2) Cruciferae  
 (3) Compositae (4) Solanaceae
118. When generic name is repeated in specific name of a plant it is called  
**Or**  
 In fish, *Catla catla* the specific name is identical with the generic name, thus it is an example of  
 (1) Synonyms (2) Antonyms  
 (3) Tautonyms (4) None of the above
119. Which of the following gymnosperm is a bushy trailing shrub?  
 (1) *Ephedra*, (2) *Cycas*  
 (3) *Pinus* (4) *Araucaria*
120. Study the following :
- | List-I |                         | List-II |                           |
|--------|-------------------------|---------|---------------------------|
| A      | Oxygen evolving complex | I.      | Potassium ferric oxalate  |
| B      | Proton gradient         | II.     | High oxygen concentration |
| C      | Hill reagent            | III.    | ATP synthesis             |
| D      | Photorespiration        | IV.     | Phaeophytin               |
|        |                         | V.      | Photolysis of water       |

The correct match is :


	A	B	C	D
(1)	V	III	I	II
(2)	I	II	IV	V
(3)	V	I	IV	II
(4)	I	IV	III	V

121. The given figure shows four coleoptiles set up at the start of an experiment



Which two coleoptiles will bend towards the source

- (1) 3 and 4                      (2) 2 and 3  
 (3) 1 and 4                      (4) 1 and 2
122. Which of the following pigments are found in brown algae?  
 (1) Chl a, Chl c  
 (2) Chl a, Chl d  
 (3) Chl a, Chl c and fucoxanthin  
 (4) Chl a, phycoerythrin
123. Static concept of specis was put forward by  
 (1) De candolle              (2) Linnaeus  
 (3) Theophrastus              (4) Darwin
124. In conifers, transpiration is reduced due to the presence of:  
 (1) Needle-like leaves  
 (2) Thick cuticle in leaves  
 (3) Sunken stomata in leaves  
 (4) All are correct
125. Centriole replicates during  
 (1) Interphase              (2) Early prophase  
 (3) Late prophase              (4) Late telophase.
126. What is true for the structures marked as A and B ?



- (1) A is evolutionarily more advanced than B  
 (2) A possess pits but B lack pit formation  
 (3) A is devoid of protoplasm whereas B posses it  
 (4) A transports water and minerals and B also transports water and minerals

127. Stomatal movement is not affected by  
 (1) Temperature              (2) Light  
 (3) CO<sub>2</sub> concentration      (4) O<sub>2</sub> concentration
128. Ribosomes are the centre for  
 (1) respiration              (2) photosynthesis  
 (3) protein synthesis      (4) fat synthesis
129. Lipids are arranged within the membrane with  
 (1) polar heads toward inner side and the hydrophobic tails toward outside  
 (2) both heads and tails toward outside  
 (3) heads toward outside and tail towards inside  
 (4) both heads and tails toward innerside.
130. A: There is division of labour within the chloroplast.  
 R: function of chloroplast is to trap sunlight only  
 (1) Both A and R are correct and R is the correct explanation of A  
 (2) A is not correct but R is correct  
 (3) A is correct but R is not correct  
 (4) Both A and R are correct but R is NOT the correct explanation of A
131. How many turns of Calvin cycle yield one molecule of glucose ?  
 (1) Eight                      (2) Two  
 (3) Six                          (4) Four
132. In a botanical garden, labelling of plants indicates  
 (1) scientific name only  
 (2) scientific name and family  
 (3) common name, scientific name and order  
 (4) common name only
133. Evergreen trees remain green throughout the year on account of  
 (1) Absence of leaf fall  
 (2) Leaves falling in small numbers at intervals  
 (3) Supply of the moisture throughout the year  
 (4) Cold climate
134. r-phycoerythrin to character of algae with ..... as forge product :  
 (1) Algin                      (2) Agar  
 (3) Carrageen              (4) Floridean starch
135. Inclusion bodies of blue-green, purple and green photosynthetic bacteria are  
 (1) Microtubules              (2) Contractile vacuoles  
 (3) Gas vacuoles              (4) Centroles

## SECTION - B

(Attempt any 10(Ten) questions out of 15 (Fifteen))

136. Dichlorophenyl dimethyl urea (DCMU) :
- (1) Inhibits  $O_2$  evolution and non-cyclic photophosphorylation
  - (2) Promotes  $O_2$  evolution and non-cyclic photophosphorylation
  - (3) Both (1) and (2)
  - (4) None of the above
137. In which of the following, all three are macronutrients?
- (1) Boron, zinc, manganese
  - (2) Iron, copper, molybdenum
  - (3) Molybdenum, magnesium, manganese
  - (4) Nitrogen, calcium, phosphorus
138. The formation of recombination nodules and terminalisation occurs respectively during :
- (1) Pachytene and diakinesis
  - (2) Leptotene and zygotene
  - (3) Zygotene and diakinesis
  - (4) Diplotene and diakinesis
139. What amount of energy is released from glucose during lactic acid fermentation ?
- (1) More than 18%      (2) About 10%
  - (3) Less than 7%      (4) Approximately 15%
140. Balbiani rings (puffs) are sites of
- (1) DNA replication
  - (2) RNA and protein synthesis
  - (3) synthesis of polysaccharides
  - (4) synthesis of lipids
141. Gemmae are multicellular green structures for vegetative propagation. These are found inside gemma cups in
- (1) *Riccia* capsule
  - (2) *Marchantia* thallus
  - (3) *Funaria* protonema
  - (4) *Polytrichum* thallus.
142. The monovalent ions usually \_\_\_\_\_ membrane permeability whereas divalent ions usually \_\_\_\_\_ it.
- (1) Decrease, decrease
  - (2) Increase, increase
  - (3) Increase, decrease
  - (4) Decrease, increase
143. Golgi complex is specialized from:
- (1) Energy transduction
  - (2) Glycosidation of lipids
  - (3) Digestion
  - (4) Conversion of energy
144. The final electron acceptor during the light reaction of photosynthesis is :
- (1) Chlorophyll-*a*      (2) Ferredoxin
  - (3) Plastoquinone      (4) Cytochromes
145. I.  $C_2H_4$  promotes leaf senescence  
 II.  $C_2H_4$  speeds the ripening of fruits  
 III.  $C_2H_4$  causes apical hook formation  
 IV.  $C_2H_4$  promotes horizontal growth of seedling and swelling of axis  
 V.  $C_2H_4$  promotes male flowers in cucumber thereby increasing the yield Which one is false ?
- (1) All      (2) I and V
  - (3) II and IV      (4) V
146. Thick cuticle, sunken stomata are found in leaves of:
- (1) Hydrophytes      (2) Xerophytes
  - (3) Mesophytes      (4) Epiphytes
147. Which is not an antitranspirant:
- (1) Low viscosity resin      (2) BAP
  - (3) Silicon oil      (4) PMA
148. A scientist having made significant contribution in the field of classification is
- (1) Pasteur      (2) Oparin
  - (3) Darwin      (4) Linnaeus
149. Water soluble pigment present in cell vacuole is
- (1) Anthocyanin      (2) Carotene
  - (3) Xanthophyll      (4) Chlorophyll.
150. The process of transfer of amino group from one amino acid to the keto group of a keto acid is called \_\_\_\_\_.
- (1) oxidative amination      (2) reductive amination
  - (3) transamination      (4) deamination

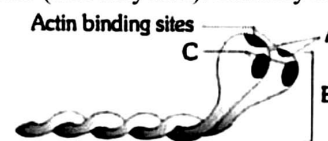
## PART - IV : ZOOLOGY

## SECTION - A

151. Pons Varolii connects the lateral parts of  
 (1) cerebrum (2) cerebellum  
 (3) medulla oblongata (4) pituitary.
152. Our paired eyes are located in sockets of skull called :  
 (1) Orbicules (2) Orbit  
 (3) Ocelle (4) Ostiole
153. The structural and functional unit between the developing foetus and maternal body is called :  
 (1) Yolk sac (2) Cervix  
 (3) Vagina (4) Placenta
154. *Mycoplasma* causes a disease :  
 (1) Tobacco wilt (2) Citrus canker  
 (3) Apple fireblight (4) Little leaf diseases
155. Which of the following is the simplest amino acid?  
 (1) Tyrosine (2) Asparagine  
 (3) Glycine (4) Alanine
156. Match the following and mark the correct option
- | Column I              | Column II             |
|-----------------------|-----------------------|
| A. Fast muscle fibres | i. Myoglobin          |
| B. Slow muscle fibres | ii. Lactic acid       |
| C. Actin filament     | iii. Contractile unit |
| D. Sarcomere          | iv. I-band            |
- Options  
 (1) A-i, B-ii, C-iv, D-iii (2) A-ii, B-i, C-iii, D-iv  
 (3) A-ii, B-i, C-iv, D-iii (4) A-iii, B-ii, C-iv, D-i
157. The medullary pyramic of kidney projects into :  
 (1) Calyces (2) Ureter  
 (3) Renal capsule (4) Cortex
158. Which one is called as sole member of kingdom monera  
 (1) Cyanobacteria (2) Bacteria  
 (3) Archebacteria (4) All above
159. The nerves leading to the central nervous system are called  
 (1) Efferent (2) Afferent  
 (3) Motor (4) None
160. You are watching a horror movie and you notice that your heart is beating fast and mouth is dry. It is because of  
 (1) Fight and flight response  
 (2) Autonomic nervous system  
 (3) Sympathetic nervous system  
 (4) Both (1) and (3)

161. What is true about pituitary glands?  
 (1) it is located in a bony cavity called sella tursica  
 (2) it is attached to hypothalamus by a stalk  
 (3) pars distalis secretes various hormones which are under the control of hypothalamus  
 (4) all of the above

162. The given figure is associated with myosin monomer (meromyosin). Identify A to C



- (1) A - cross arm, B - head, C - ATP binding sites  
 (2) A - head, B - cross arm, C - ATP binding sites  
 (3) A - head, B - cross arm, C - Ca<sup>2+</sup> binding sites  
 (4) A - head, B - cross arm, C - GTP binding sites
163. Lumbar vertebra are found in  
 (1) Neck region (2) Abdominal region  
 (4) Hip region (4) Thorax

164. Match List-I with List-II.

List-I	List-II
(A) Protein	(i) C=C double bonds
(B) Unsaturated fatty acid	(ii) Phosphodiester bonds
(C) Nucleic acid	(iii) Glycosidic bonds
(D) Polysaccharide	(iv) Peptide bonds

Choose the correct answer from the options given below.

- (A) (B) (C) (D)  
 (1) (iv) (iii) (i) (ii)  
 (2) (iv) (i) (ii) (iii)  
 (3) (i) (iv) (iii) (ii)  
 (4) (ii) (i) (iv) (iii)

165. Match the items in column I with those in column II and choose the correct option.

Column-I	Column-II
(A) Chelone	(1) Wall lizard
(B) Bangarus	(2) Viper
(C) Calotes	(3) Krait
(D) Hemidactylus	(4) Garden lizard
	(5) Turtle
	(6) Tortoise

**Option :**

- (1) A-3    B-2    C-1    D-6  
 (2) A-5    B-3    C-4    D-1  
 (3) A-5    B-4    C-1    D-6  
 (4) A-2    B-5    C-1    D-6

- 166.** In hypermetropia, the image is formed :  
 (1) Behind retina and is corrected by concave lens  
 (2) Before retina and is corrected by convex lens  
 (3) Before retina and is corrected by concave lens  
 (4) Behind retina and is corrected by convex lens
- 167.** Trochophore larva occurs in  
 (1) Annelida and Porifera  
 (2) Coelenterata and Annelida  
 (3) Mollusca and Coelenterata  
 (4) Annelida and Mollusca
- 168.** Receptor sites for neurotransmitters are presents on  
 (1) Membranes of synaptic vesicles  
 (2) Pre-synaptic membrane  
 (3) Tips of axons  
 (4) Post-synaptic membrane
- 169.** Comprehension of spoken and written words take place in the region of  
 (1) association area            (2) motor area  
 (3) Wernicke's area            (4) Broca's area.
- 170.** The junction between the axon of one neuron and the dendrite of the next is called  
 (1) a synapse                    (2) constant bridge  
 (3) a joint                        (4) junction point
- 171.** During cardiac cycle each ventricle pumps out about 70 ml of blood which is called  
 (1) Stroke volume            (2) Cardiac output  
 (3) Tidal volume                (4) Residual volume
- 172.** Which of the following is wrong ?  
 (1) Saliva is a type of exocrine secretion  
 (2) Cartilage is the only type of specialized connective tissue  
 (3) Areolar tissue is most widely distributed connective tissue  
 (4) Salivary glands, intestinal glands and most of the sweat glands are merocrine glands
- 173.** Which of the following is found only in animals?  
 (1) Cholesterol                (2) Diosgenin  
 (3) Glycoprotein                (4) Vit. A
- 174.** NaCl is transported by the ascending limb of Henle's loop which is exchanged with  
 (1) DCT  
 (2) PCT  
 (3) Ascending limb of vasa recta  
 (4) Descending limb of vasa recta
- 175.** Which of the following does not favour the formation of large quantities of dilute urine ?  
 (1) Caffeine  
 (2) Renin  
 (3) Atrial natriuretic factor  
 (4) Alcohol
- 176.** *Wuchereria bancrofti* is a common filarial worm. It belongs to phylum  
 (1) Platyhelminthes            (2) Aschelminthes  
 (3) Annelida                      (4) Coelenterata
- 177.** The urine of a man is very dilute and the quantity of urine is too much and dehydration has started in his body and he is very thirsty by the cause of  
 (1) Hypersecretion of ADH  
 (2) Hyposecretion of ADH  
 (3) Both (1) and (2)  
 (4) None of the above
- 178.** Peptidoglycan is characteristic constituent of cell wall in:  
 (1) Archaeobacteria and Eukaryotes  
 (2) Eubacteria and unicellular Eukaryotes  
 (3) Bacteria and Cyanobacteria  
 (4) Monera and Protista
- 179.** ATPase enzyme required for muscular contraction is found in:  
 (1) Myosin                        (2) Tropomyosin  
 (3) Actin                          (4) Troponin
- 180.** Epithelial tissue with thin flat cells appearing like packed tiles occurs on  
 (1) Inner lining of cheek  
 (2) Inner lining of stomach  
 (3) Inner lining of fallopian tubes  
 (4) Inner lining of ovary
- 181.** Which one of the following flows directly into blood from the seat of its production to act on an organ away from it  
 (1) Enzyme                        (2) Hormone (Renin)  
 (3) Blood                         (4) Lymph



182. Which one of the following pairs of animals are similar to each other pertaining to the feature stated against them?
- (1) Pteropus and Ornithorhynchus - viviparity
  - (2) Garden lizard and crocodile - three heart chambered
  - (3) Ascaris and Ancylostoma - metameric segmentation
  - (4) Sea horse and flying fish - cold blooded (poikilothermal)
183. Which of the following characters are related to lampreys?
- (1) They have two nostrils
  - (2) They have a persistent notochord
  - (3) They have a bifid stomach
  - (4) They live in fresh water
184. Pectoral girdle constitute
- (1) scapula and clavicle
  - (2) radius and ulna
  - (3) ilium and ischium
  - (4) maxilla and mandible.
185. Find the correct pathway of blood in the kidney.
- I. Peritubular capillary and vasa recta
  - II. Renal vein
  - III. Efferent arteriole
  - IV. Renal artery
  - V. Glomerulus
  - VI. Afferent arteriole
- (1) I → II → IV → III → VI → V
  - (2) IV → VI → V → I → II → III
  - (3) IV → V → VI → I → III → II
  - (4) IV → VI → V → III → I → II

### SECTION - B

(Attempt any 10(Ten) questions out of 15 (Fifteen))

186. Which of the following happens in the common cockroach?
- (1) Malpighian tubules are excretory organs projecting out from the colon.
  - (2) Oxygen is transported by haemoglobin in blood.
  - (3) Nitrogenous excretory product is urea.
  - (4) The food is ground by mandibles and gizzard.

187. Bone marrow in some bones is important for
- (1) Production of RBCs
  - (2) Breakdown of RBC
  - (3) Production of WBC
  - (4) Breakdown of WBCs
188. Nutrients absorbed by the blood capillaries of intestinal villi first go into
- (1) liver through hepatic portal vein
  - (2) hepatic artery
  - (3) aorta
  - (4) posterior vena cava
189. Hearts of Pheretima are situated in the segments
- (1) 10, 13, 16 and 17
  - (2) 7, 9, 12 and 13
  - (3) 4, 5, 10 and 13
  - (4) 11, 14, 17 and 18
190. Animals/organisms floating on the surface of water are
- (1) Plankton
  - (2) Pelagic
  - (3) Benthon
  - (4) Neritic
191. One of the constituents of the pancreatic juice while poured into the duodenum in humans, is:
- (1) trypsinogen
  - (2) chymotrypsin
  - (3) trypsin
  - (4) enterokinase
192. Modern detergents contain enzyme preparations of:
- (1) Thermoacidophiles
  - (2) Thermophiles
  - (3) Acidophiles
  - (4) Alkaliphiles
193. In neurons the average resting membrane potential value is -70 mV. This minus (-) sign indicates that:
- (1) Inner side of the membrane is negative relative to the outer side
  - (2) Outer side of the membrane is negative relative to the inner side
  - (3) Both the outer and inner sides are negative
  - (4) Outer side of the membrane is negative and inner side is positive
194. When 2 to 3 drops of benedict's reagent are added to a urine sample and heated gently, it turns yellow. This colour change indicates that
- (1) Urine contains 2% glucose
  - (2) Urine contains 0.5% glucose
  - (3) Urine contains 1.5% glucose
  - (4) Urine contains 1% glucose
195. Which type of tissue correctly matches with its location?
- | Tissue                      | Location            |
|-----------------------------|---------------------|
| (1) Transitional epithelium | - Tip of nose       |
| (2) Cuboidal epithelium     | - Lining of stomach |
| (3) Smooth muscle           | - Wall of intestine |
| (4) Areolar tissue          | - Tendons           |

196. Hepatic portal system is a
- (1) vascular connection between the digestive tract and liver
  - (2) vascular connection between the liver and lungs
  - (3) vascular connection between the spleen and liver
  - (4) vascular connection between the digestive tract and spleen
197. Oxytocin helps in
- (1) lactation
  - (2) child birth
  - (3) ovulation
  - (4) implantation of the embryo
198. Which of the following are not secondary metabolites in plants ?
- (1) Rubber, gums
  - (2) Morphine, codeine
  - (3) Amino acids, glucose
  - (4) Vinblastin, curcumin
199. Air sac regulates buoyancy in :
- (1) chondrichthyes      (2) osteichthyes
  - (3) whales                (4) none
200. Which of the following are saprophytic protists?
- (1) Slime moulds            (2) Fungi
  - (3) Bacteria                 (4) Dinoflagellates

---

*Space for rough work*

# MOMENTIAN'S RESULTS - 2023

## Our Students Shine in JEE Advanced



**DIVYAMAN PAL**  
AIR - 1023  
IIT Kanpur, Civil



**SWETA CHANDRA**  
AIR - 2352  
IIT Kharagpur, Civil



**ANSHUMAN**  
AIR - 3359  
NIT Patna, C.S



**KUMAR ARPIT**  
AIR - 4294  
IIT Hyderabad, C.S



**VANSHIKA TULSYAN**  
AIR - 5601  
IIT Dhanbad

## Our Students Shine in NEET



**PRANSHU PRIYA**  
Score: 686 / 720  
IMS BHU, Varanasi



**SHREYANSH JAISWAL**  
Score: 670 / 720  
KGMU, Lucknow



**SAWAI SUTHAR**  
Score: 651 / 720  
Rabindranath Tagore  
Medical College, Udaipur



**AAKASH PANDEY**  
Score: 640 / 720  
BRD Medical College,  
Gorakhpur



**PRAGATI MISHRA**  
Score: 635 / 720  
Govt. Medical College  
Ayudhya



**MANVI VERSHANEY**  
Score: 622 / 720  
ASMC, Pratapghar

  
**MOMENTUM**  
IIT-JEE | NEET | Foundations  
(A Division of Momentum Eduserve Pvt. Limited)

**Head Office : Chhatra Sangh Chowk, Gorakhpur**  
**Mob. No. 6390903200, 6390903201**



Branch Office : Awasi Vikas (Near Kali Mandir), Basti  
Ph: +91-6390903210, 6390903211



Branch Office : Tahsil Road (Tahsil Gate), Deoria  
Ph: +91-6390903213, 6390903214